
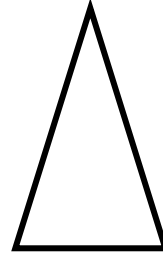

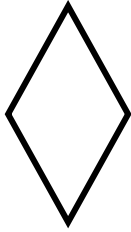


Which shape am i?



Which shape am I describing? Write the number inside the shape and cross them off as you use the description.

- 1) I have got 2 acute angles and 2 obtuse angles. ()
- 2) I have got 3 acute angles. ()
- 3) I have got 1 right angle. ()
- 4) I have got one reflex angle. ()
- 5) I have got 4 acute and 4 reflex angles. ()
- 6) I have got no right angles. ()
- 7) I have got 2 acute angles and 2 obtuse angles. ()

8) I have got 4 right angles. ()


9) I have got 3 right angles, 1 obtuse and 1 reflex angle. ()

10) I have got 2 right angles, 2 obtuse and 1 acute angle. ()

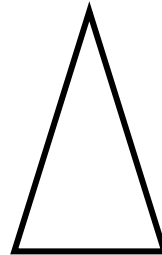
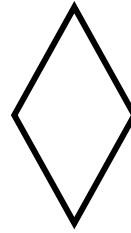

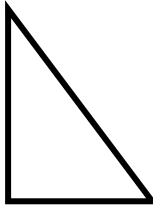

Use the shapes on your table for examples and draw 5 different shapes with a ruler.

Then say how many of each angle these shapes have.

Using, right angles, acute, obtuse AND reflex angles.



Which shape am i?



Which shape am I describing? Write the number next to the shape and cross them off as you use the description.

- 1) I have got four right angles. ()
- 2) I have got 3 acute angles. ()
- 3) I have got 2 acute angles and one right angle. ()
- 4) I have got one acute angle. ()
- 5) I have got one right angle. ()
- 6) I have got no right angles. ()
- 7) I have got 2 acute angles and 2 obtuse angles. ()

8) I have got no right angles. ()

9) I have got obtuse angles and 2 acute angles. ()

10) I have got one reflex angle. ()


Write in degrees, 2 examples for each of these angles-

a) Acute _____

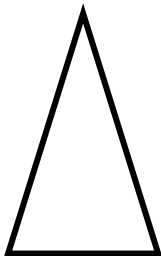

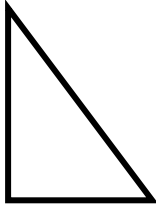
b) Obtuse _____

Use the shapes on your table for examples and draw 5 different shapes with a ruler.

Then say how many of each angle these shapes have.



Which shape am i?



Which shape am I describing? Write the number next to the shape and cross them off as you use the description.

- 1) I have got four right angles. ()
- 2) I have got 3 acute angles. ()
- 3) I have got 2 acute angles and one right angle. ()
- 4) I have got one acute angle. ()
- 5) I have got one right angle. ()
- 6) I have got no right angles. ()

Write in degrees, 2 examples for each of these angles-

c) Acute _____

d) Obtuse _____

Use the shapes on your table for examples and draw 5 different shapes with a ruler.

Then say how many of each angle these shapes have.

