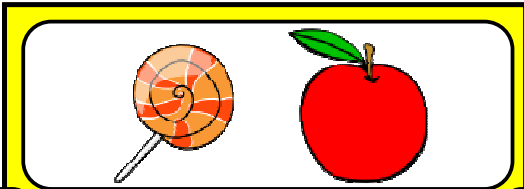


Write the coins needed to make each amount.



+

7c

12c

+




+

25c

51c

+

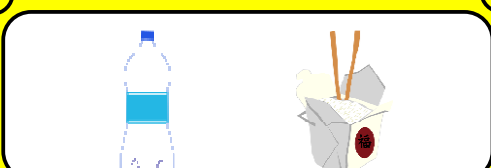


+

70c

€1.50

+



+  +

€1.15

€3.20

+  +

