


Draw some more cubes and find out how many?


How many?

Tens and ones

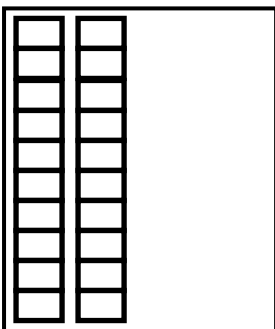
Number




\_\_\_ ten and \_\_\_ ones



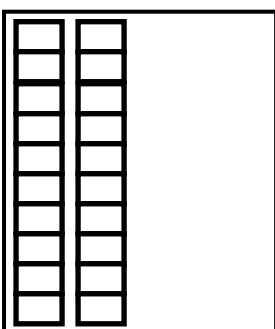
\_\_\_ ten and \_\_\_ ones



\_\_\_ tens and \_\_\_ ones



\_\_\_ ten and \_\_\_ ones



\_\_\_ tens and \_\_\_ ones