
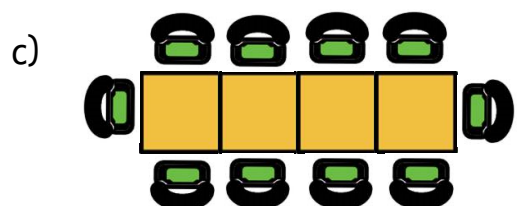
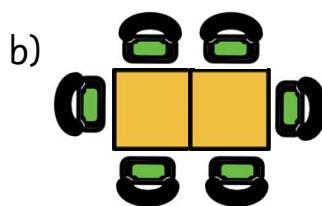
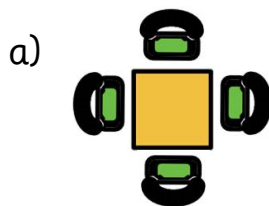


Suppose there were going to be just 12 people at the family reunion.

- What different table arrangements are possible? Find the layout which would be the cheapest for Mr. and Mrs. Comfort and draw it below.



- If each side of the square table is 80cm long, calculate the perimeter and area of these table layouts:



- Explain why there were extra chairs each time tables were moved together.

---



---