



# Windy day take away

Count the objects that have blown away and write the number in the second box.

Finish the calculation.



$$10 - 1 = \square$$



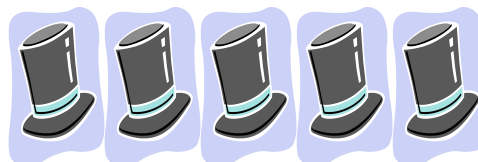
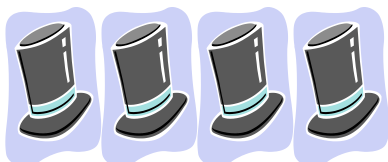
$$5 - \square = \square$$



$$4 - \square = \square$$



$$7 - \square = \square$$



$$9 - \square = \square$$