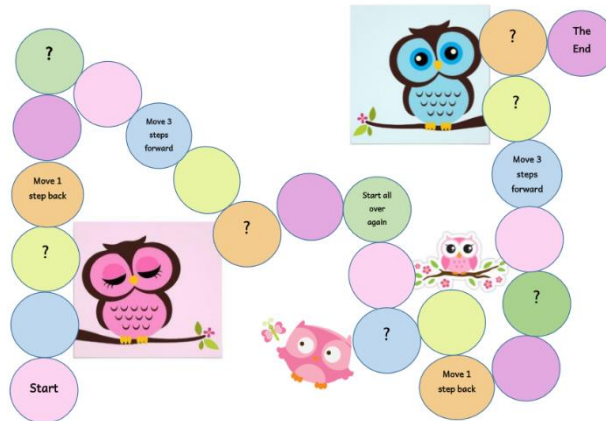


Let's Play...

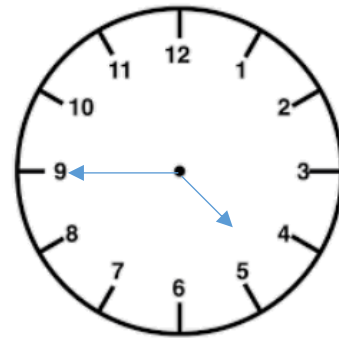


- Print the board game or copy on a piece of cardboard.
- Each time you land on a question mark you need to answer one of the below task cards.

1. Draw the hands to show this time:

4.45pm.


Note: Make sure that the hour hand nearly on 5.



2. Gary had a football match at 8.30. He finished at 9.45. How long did it take him? **1 hr 15 mins = 75 minutes**

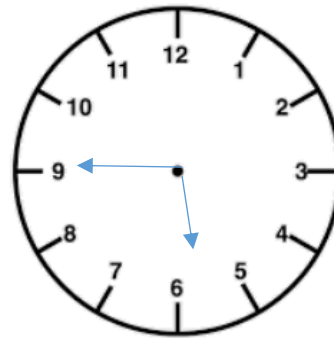
3. What is the time shown on this clock?

It is quarter to 3/2.45.



4. Draw the hands on the clock to show the time which is one hour earlier than quarter to 7.

*Note: Make sure that at quarter to the hour hand is **nearly** on 6.*



5. There are **240** minutes in four hours.

6. There are **72** hours in 3 days.

7. How many jumping jacks can you do in one minute?

Guess:

Various Answers

Check:

8. How many toilet paper rolls can you stack in 30 seconds

Guess:

Various answers

Check:

A toilet paper roll is approximately 9.5cm in height.

Estimate the height of the tower you built in 30 seconds.

Various answers. E.g.: If I managed to stack 20 rolls in a single tower than the tower is around 200cm (2m). I rounded 9.5cm to 10cm. 20 rolls of 10cm = 200cm.

Would you measure the tower in cm or in m? *cm/m.*

Why? *Depends on the height of tower or on the measuring tool.*

Actual Height: *e.g. 190cm /1.9m* Measuring tool used: *E.g. measuring tape*

How many rolls would you stack in 1 minute? *E.g. I stacked 40 rolls in 1 min.*

How did you come to this conclusion? *E.g. Double the time, double the amount.*

9. How many Sundays in the Month of June? **Four/4**
What day will the 2nd of July be? **Thursday**

June 2020

Sunday	Monday	Tuesday	Wednesday	Thursday	Friday	Saturday
	1	2	3	4	5	6
7	8	9	10	11	12	13
14	15	16	17	18	19	20
21	22	23	24	25	26	27
28	29	30				

10. It is quarter past 6. What will the time be two and a half hours from now? **Quarter to 9/8.45**

11. It is half past 11. What was the time 2 $\frac{1}{4}$ hours before? **Quarter past 9/9.15**

12. How long is it from 5.30am to 1.15pm? **7 hours 45 mins**

13. Write a question of your own related to time... ☺
Various answers