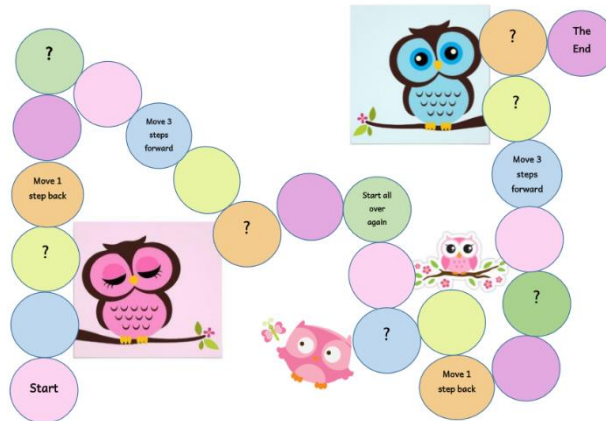
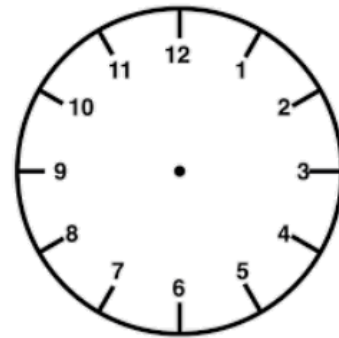


Let's Play...




- Print the board game or copy on a piece of cardboard.
- Each time you land on a question mark you need to answer one of the below task cards.

1. Draw the hands to show this time:
4.45pm.

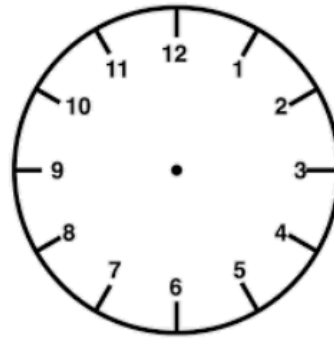


2. Gary had a football match at 8.30. He finished at 9.45. How long did it take him? _____ hr _____ mins = _____ minutes

3. What is the time shown on this clock?



4. Draw the hands on the clock to show the time which is one hour earlier than quarter to 7.



5. There are _____ minutes in four hours.

6. There are _____ hours in 3 days.

7. How many jumping jacks can you do in one minute?

Guess:

Check:

8. How many toilet paper rolls can you stack in 30 seconds?

Guess:

Check:

A toilet paper roll is approximately 9.5cm in height.

Estimate the height of the tower you built in 30 seconds _____.

Would you measure the tower in cm or in m? _____. Why?

Actual Height: _____. Measuring tool used: _____.

How many rolls would you stack in 1 minute? _____.

How did you come to this conclusion? _____.

9. How many Sundays in the Month of June? _____

What day will the 2nd of July be?

June 2020

Sunday	Monday	Tuesday	Wednesday	Thursday	Friday	Saturday
	1	2	3	4	5	6
7	8	9	10	11	12	13
14	15	16	17	18	19	20
21	22	23	24	25	26	27
28	29	30				

10. It is quarter past 6. What will the time be two and a half hours from now?

11. It is half past 11. What was the time $2\frac{1}{4}$ hours before?

12. How long is it from 5.30am to 1.15pm?

13. Write a question of your own related to time... ☺