

SPECIMEN

Year 4

MATHEMATICS MENTAL PAPER

TIME: 15 minutes

Name: _____

Class: _____

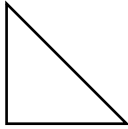


Instructions to Candidates

- The teacher will read each question twice. Listen carefully to the teacher both times. You will then have time to work out your answer.
- If you make a mistake, cross out the wrong answer and write the correct answer next to it.
- You will not be allowed to ask any questions once the test has started.
- You may do your working on the free space on the paper but write your answer in the box given.
- This paper carries a total of 20 marks.

MENTAL PAPER ANSWER SHEET

1	equal sides
---	-------------

2	22, 21, 20 _____
---	------------------

3	  
---	--

4	tens
---	------

5	<input type="checkbox"/> metres <input type="checkbox"/> kilometres
---	---

6	
---	--

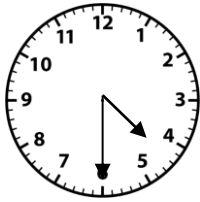

300

7	
---	--

halves

8	days
---	------

9	
---	--

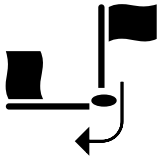
10	<input type="checkbox"/>		<input type="checkbox"/>	
----	--------------------------	---	--------------------------	--

11	<input type="checkbox"/> 5 cm	<input type="checkbox"/> 20 cm	<input type="checkbox"/> 90 cm
----	-------------------------------	--------------------------------	--------------------------------

12	
----	--

35

13	<input type="checkbox"/> clockwise	<input type="checkbox"/> anti-clockwise
----	------------------------------------	---



14	millilitres
----	-------------




15	
----	--


15

16	€
----	---

€13.99

17	children
----	----------

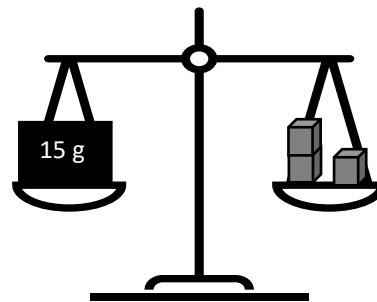
Pets Owned	
Cat	
Dog	
Hamster	

 = 2 children

18	
----	--

43

19	grams
----	-------



20	
----	--

Mariah's birthday - 25th July

END OF MENTAL PAPER